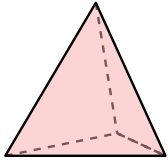




Determine which choice BEST describes the shape shown.

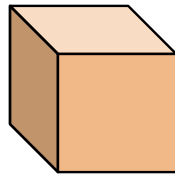
Answers

1)



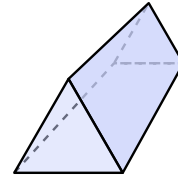
- A. Triangular Pyramid
- B. Cube
- C. Rectangular Pyramid
- D. Triangular Prism

2)



- A. Rectangular Pyramid
- B. Cone
- C. Cube
- D. Triangular Pyramid

3)



- A. Rectangular Prism
- B. Rectangular Pyramid
- C. Sphere
- D. Triangular Prism

1. _____

2. _____

3. _____

4. _____

5. _____

6. _____

7. _____

8. _____

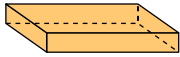
9. _____

10. _____

11. _____

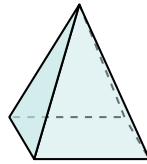
12. _____

4)



- A. Cylinder
- B. Sphere
- C. Triangular Prism
- D. Rectangular Prism

5)



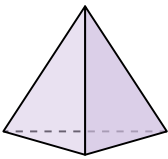
- A. Cone
- B. Rectangular Pyramid
- C. Triangular Pyramid
- D. Cylinder

6)



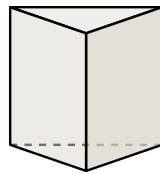
- A. Sphere
- B. Cube
- C. Cylinder
- D. Triangular Prism

7)



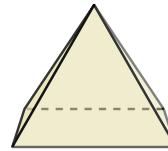
- A. Triangular Pyramid
- B. Triangular Prism
- C. Cylinder
- D. Rectangular Prism

8)




- A. Cube
- B. Triangular Pyramid
- C. Cylinder
- D. Triangular Prism

9)



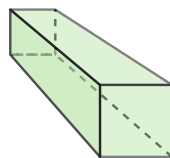
- A. Sphere
- B. Cube
- C. Cone
- D. Rectangular Pyramid

10)



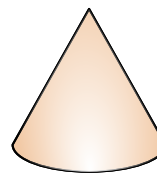
- A. Triangular Prism
- B. Cone
- C. Cube
- D. Sphere

11)



- A. Rectangular Pyramid
- B. Cylinder
- C. Sphere
- D. Rectangular Prism

12)



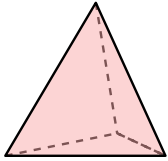
- A. Triangular Pyramid
- B. Cylinder
- C. Cone
- D. Sphere



Determine which choice BEST describes the shape shown.

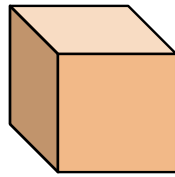
Answers

1)



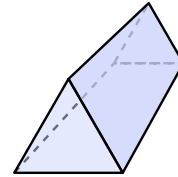
- A. Triangular Pyramid
- B. Cube
- C. Rectangular Pyramid
- D. Triangular Prism

2)



- A. Rectangular Pyramid
- B. Cone
- C. Cube
- D. Triangular Pyramid

3)



- A. Rectangular Prism
- B. Rectangular Pyramid
- C. Sphere
- D. Triangular Prism

1. **A**

2. **C**

3. **D**

4. **D**

5. **B**

6. **C**

7. **A**

8. **D**

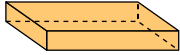
9. **D**

10. **D**

11. **D**

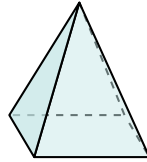
12. **C**

4)



- A. Cylinder
- B. Sphere
- C. Triangular Prism
- D. Rectangular Prism

5)



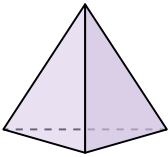
- A. Cone
- B. Rectangular Pyramid
- C. Triangular Pyramid
- D. Cylinder

6)



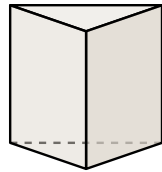
- A. Sphere
- B. Cube
- C. Cylinder
- D. Triangular Prism

7)



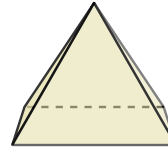
- A. Triangular Pyramid
- B. Triangular Prism
- C. Cylinder
- D. Rectangular Prism

8)




- A. Cube
- B. Triangular Pyramid
- C. Cylinder
- D. Triangular Prism

9)



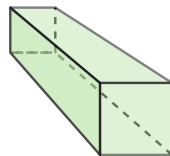
- A. Sphere
- B. Cube
- C. Cone
- D. Rectangular Pyramid

10)



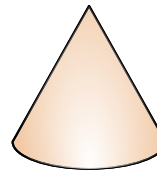
- A. Triangular Prism
- B. Cone
- C. Cube
- D. Sphere

11)



- A. Rectangular Pyramid
- B. Cylinder
- C. Sphere
- D. Rectangular Prism

12)



- A. Triangular Pyramid
- B. Cylinder
- C. Cone
- D. Sphere